



DIVINE EDUCATION CENTRE

PRE-PRIMARY LEAVING EXAMINATION

2022

SOCIAL STUDIES WITH RELIGIOUS EDUCATION (ITEM 1 of 4)

Time allowed: 2 hours 15 minutes

Random No.						Personal No.		

Candidate's name:

Candidate's Signature:

District No:

--	--	--	--

Read the following instructions carefully:

1. Do not write your **school** or **district name** anywhere on this paper.
2. This paper has two sections **A** and **B**. Section **A** has **40 questions** and **section B** has **15 questions**. This paper has **12 pages** printed altogether.
3. Answer **all** questions. All the working for both sections **A** and **B** must be shown in the spaces provided.
4. **All** working must be done using a **blue** or **black** ball point pen or ink. Any work done in pencil will **NOT** be marked except drawings and diagram.
5. Unnecessary **changes** in your work and handwriting that cannot be easily read may lead to loss of marks.
6. Do not fill anything in the table indicated
"For examiners' use only" and the boxes inside the question paper.

FOR EXAMINERS' USE ONLY		
Qn. No.	MARKS	EXR'S No.
1 - 10		
11 - 20		
21 - 30		
31 - 40		
41 - 43		
44 - 46		
47 - 49		
50 - 52		
53 - 55		
TOTAL		

SECTION A:40 MARKS

Questions 1 to 40 carry one mark each.

- 1- What do we call the angular distance of a place north or south of the earth's equator? _____
- 2- Write down one artificial raw material for making clothes.

- 3- Give one reason why Kampala City has a high population.

- 4- How do people benefit from a factory built near them in a community?

- 5- State any one disadvantage of a deficit budget to a family.

- 6- Which type of vegetation is described as "**Ever green**"?

- 7- In which way do people living on the slopes of Mount Elgon and Kilimanjaro benefit from volcanic soil?

- 8- State one major contribution of a teacher in a community.

- 9- In the space below, draw a map symbol of a rift valley.
- 10- Why should African government ensure food security?



- 11- How did Dr. Apollo Milton Obote become the first prime minister of independent Uganda?
-
- 12- Write one danger caused by floods in an area.
-
- 13- State any one cause of civil wars in Africa.
-
- 14- Give any one result of unemployment.
-
- 15- How do newspapers promote the economic development of a country like Uganda?
-
- 16- Name any one physical feature which forms a natural boundary between Tanzania and Mozambique?
-
- 17- Why did Arabs come to East Africa?
-
- 18- Uganda, Rwanda, Burundi, South Sudan are landlocked countries. Write down one disadvantage these countries have because of their location.
-
-
- 19- Which continent in Africa is also known as Oceania?
-
- 20- Mention the furthest northerly point of Africa.
-
-
- 21- State one way the government of Uganda can discourage the movement of people from rural areas to urban areas.
-

22- Give one reason why the Arab traders travelled in groups to the coast of East Africa.

23- How can a good road network promote development?

24- Give one way apartheid policy was practiced in South Africa.

25- What role is played by the Ministry of Disaster preparedness and Refugees in Uganda?

26- State one economic importance of a market to people.

27- Mention one problem caused by the tourism industry.

28- How do ocean currents determine the climate of Africa?

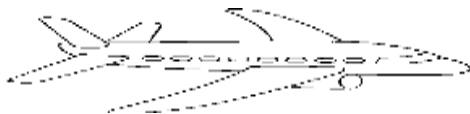
29- Give the major reason why cotton growing declined in Uganda.

30- How did Sir Samuel Baker help to end slave trade in East Africa?



31- Who is believed to be the founder of Buganda kingdom according to Banyoro tradition?

32- Name the means of transport shown below.



33- In which way does the Judiciary help to promote peace in a democratic government?

34- Which UN agency helps to conserve the environment?

35- Why do people sleep in houses?

In each of the questions 36-40 answer EITHER Christianity or ISLAMIC question but not BOTH in a particular number.

36- **Either:** Name the material God used to create Eve

Or: Name the material Allah used to create Hawa

37- **Either:** Why do Christians read the Bible?

Or: Why do Muslims read the Quran?

38- **Either:** State one importance of prophets in Christianity.

Or: State one importance of prophets in Islam.

39- **For both:** What is success?

40- **Either:** Why are Christians encouraged to dress decently while going for prayers in church?

Or: Give one reason why female Muslims do not sit in the same place with males in the mosque during prayers



SECTION B:60 MARKS

Questions 41 to 55 carry four marks each.

41- Name the main cash crop grown at Kenana Extension

(b) Give two factors that led to the establishment of Gezira Irrigation Schemes.

(i) _____

(ii) _____

(c) State one problem Gezira Irrigation Scheme faces.

42- a) Give the meaning of the term multipartism

(b) State two advantages of multipartism.

(i) _____

(ii) _____

(c) In which way does multipartism promote democracy?

43- a) Write briefly about these terms as related to rivers.

(i) A tributary

(ii) A delta

(b) State two ways rivers promote industrial growth

(i) _____

(ii) _____



44- Write ITCZ in full.

(b) How does deforestation lead to global warming?

(c) State two factors which influence the climate of an area.

(i) _____

(ii) _____

45- How is Katonga Region important to the economic development of Democratic Republic of Congo (DRC)

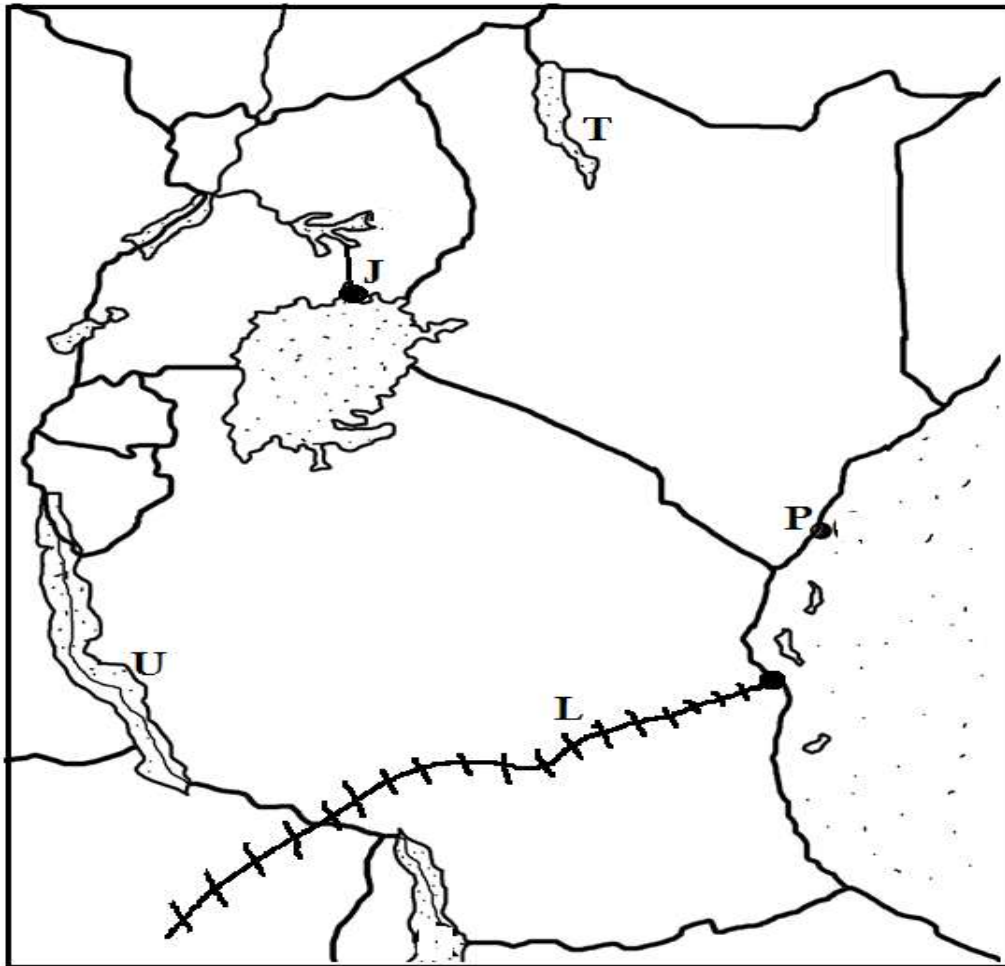
(b) Give two factors favouring oil palm growing in Democratic Republic of Congo

(i) _____

(ii) _____

(c) Why is irrigation farming not practiced in DRC?

46- Study the sketch map below and answer questions that follow.



(a) Name the railway line labeled **L**

(b) Give one economic importance of town **P** to county **J**

(c) Name the features marked with letters

(i) **U** _____

(ii) **T** _____



47- Why is Emperor Haile Selassie remembered in the political history of Africa?

(b) Name the liberation movement group which led Mozambique to independence.


(c) Write down two problems faced by African nationalists during their struggle for independence.

48- Draw the pictures of the following objects

(i) Tree



(ii) Hut




(b) Draw the maps of the following objects

(i) car



(ii) water pot



49- Which kind of trees shed their leaves during the dry season?

(b) Why do plants have the following features?

(i) broad leaves

(ii) thick barks

(c) What is the difference between short grass savanna and tall grass savanna?



Turn Over

50- Study the diagram showing levels of the local government and answer the questions that follow.



(a) What title is given to the person who heads the local council levels labelled by

(i) Y _____

(ii) Z _____

(b) Name the local council level labeled Y

(c) What title is given to the official who chairs debates in the LCV meetings?

For each of the questions 51 to 55 answer EITHER the Christian OR the Islamic questions but not BOTH in the same question.

51- **Either:** (a) Give one way Adam and Eve failed to live up to God's standards.

(b) How did God show love to Adam and Eve as part of creation?

(c) Mention two ways Christians have failed to live up to God's standards today.

(i) _____

(ii) _____

Or: (a) Give one way Adam and Hawa failed to live up to Allah's standards.

(b) How did Allah show love to Adam and Hawa as part of His creation?

(c) Mention two ways Muslims have failed to live up to Allah's standards today.

(i) _____

(ii) _____

52- **Either:** (a) Why does God allow mature Christians to get married?

(b) State any two qualities of a good marriage partner.

(i) _____

(ii) _____

(c) What role is played by a religious leader during church marriage?

Or: (a) Why does Allah allow mature Moslems to get married?

(b) State any two qualities of a good marriage partner.

(i) _____

(ii) _____

(c) What role is played by a religious leader during Nikkah?



53- **Either:** (a) What is prayer?

(b) State two importance of prayers to Christians.

(i) _____

(ii) _____

(c) Give any one way Christians should pray to God.

Or: What is salat?

(b) State any two importance of salat to Muslims

(i) _____

(ii) _____

(c) Why do Muslims humble themselves during prayer?

54- **Either:** (a) What is death?

(b) What reward will God give to the righteous Christians on the judgment day?

(c) Give two things a Christian should do to enable her /him live with God in heaven.

(i) _____

(ii) _____

Or: (a)What is death?

(b) What reward will Allah give to the righteous Muslim on judgment day?

(c)Give two things Muslims should do to enable him/ her live with Allah.

(i) _____

(ii) _____

55- **For both:** (a) What is authority?

(b) Mention two types of authority

(i) _____

(ii) _____

(c)state one way through which believers misuse their authority.

